


7 Reliez l'heure qui correspond à l'horloge.

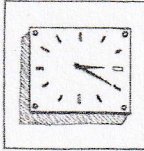
▶▶▶ Ex. 6 p. 27

Ⓐ It's half past eleven.



Ⓑ It's twenty to three.

1




Ⓒ It's twenty past three.

2




Ⓓ It's ten to ten.

3



Ⓔ It's twenty-five past eight.

4



5

>>> Twenty-five

P 25